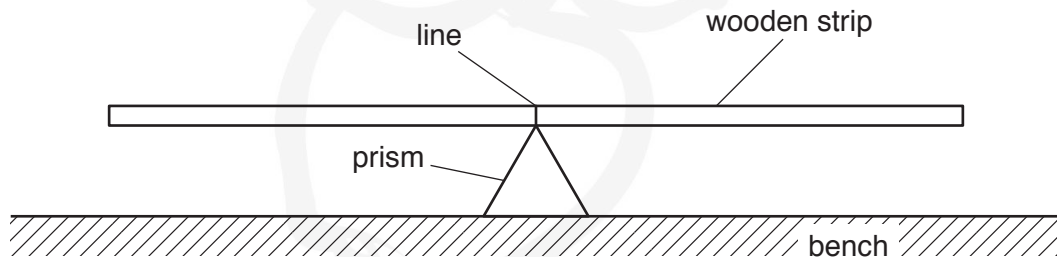




**You may not need to use all of the materials provided.**

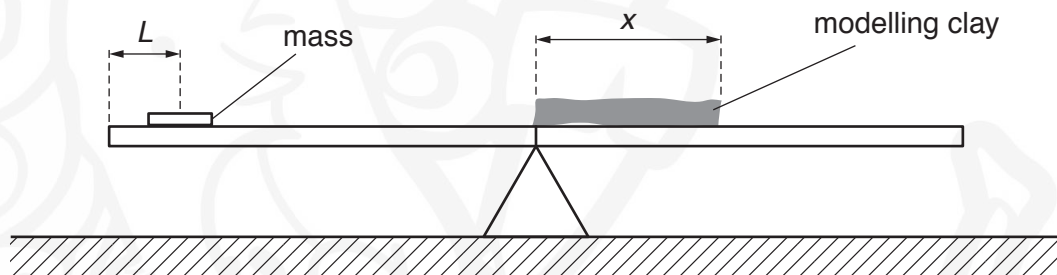
**1** In this experiment, you will investigate the equilibrium of a loaded wooden strip.

- (a) (i)**
- Balance the wooden strip on the prism.
  - Use the pencil to make a small line on the side of the wooden strip where it touches the prism, as shown in Fig. 1.1.



**Fig. 1.1**

- Roll the piece of modelling clay into a uniform cylinder of approximate length 20cm and place it on the wooden strip with one end above the line, as shown in Fig. 1.2.
- Place the mass on the wooden strip and adjust the position of the mass until the strip balances, as shown in Fig. 1.2.



**Fig. 1.2 (not to scale)**

- The length of the cylinder of modelling clay is  $x$ , as shown in Fig. 1.2.

Measure and record  $x$ .

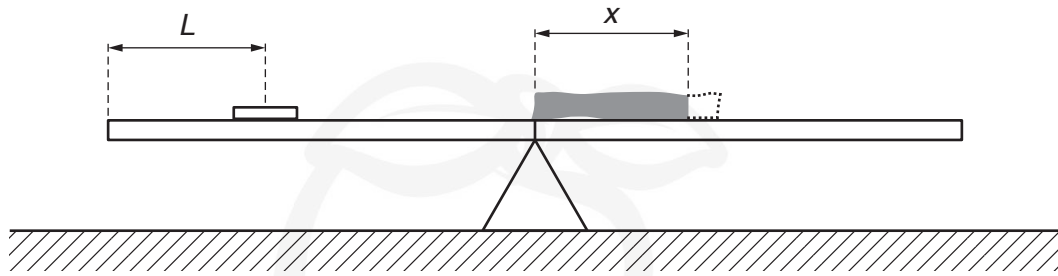
$x = \dots\dots\dots$  cm [1]

- (ii)** The distance between the centre of the mass and the end of the wooden strip is  $L$ , as shown in Fig. 1.2.

Measure and record  $L$ .

$L = \dots\dots\dots$  cm [1]

- (b) • Reduce  $x$  by cutting off and removing approximately 1 cm of the cylinder of modelling clay at the end furthest from the line, as shown in Fig. 1.3. Adjust the position of the mass until the wooden strip is balanced.



**Fig. 1.3** (not to scale)

- Measure and record the new values of  $x$  and  $L$ .

$x =$  ..... cm

$L =$  ..... cm  
[1]

- (c) Continue to reduce  $x$  until you have six sets of values of  $x$  and  $L$ . You may include your previous results.

Record your results in a table. Include values of  $x^2$  in the table.

[9]

- (d) (i) Plot a graph of  $L$  on the  $y$ -axis against  $x^2$  on the  $x$ -axis.

[3]

- (ii) Draw the straight line of best fit.


[1]

- (iii) Determine the gradient and  $y$ -intercept of this line.

gradient = .....

$y$ -intercept = .....

[2]



- (e) It is suggested that the quantities  $L$  and  $x$  are related by the equation

$$L = ax^2 + b$$

where  $a$  and  $b$  are constants.

Use your answers in (d)(iii) to determine the values of  $a$  and  $b$ .  
Give appropriate units.

$a =$  .....

$b =$  .....

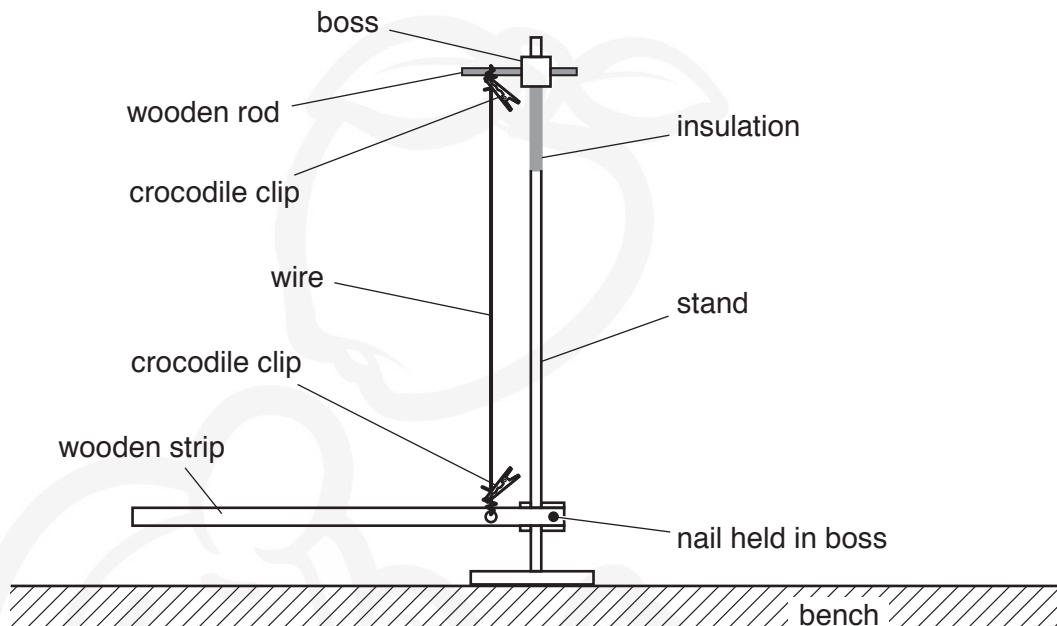
[2]

[Total: 20]

**You may not need to use all of the materials provided.**

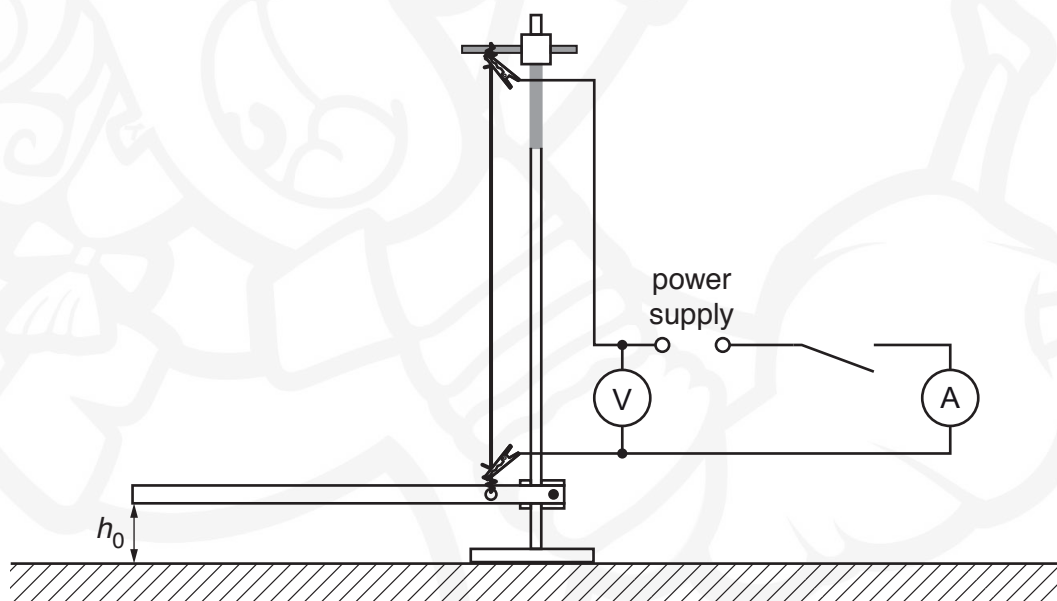
**2** In this experiment, you will investigate the expansion of a wire heated by an electric current.

- (a)** • The apparatus is partly assembled as shown in Fig. 2.1.



**Fig. 2.1**

Assemble the circuit shown in Fig. 2.2 **with the switch open** and the power supply set to its minimum voltage.



**Fig. 2.2**

- The height of the end of the wooden strip above the bench is  $h_0$ , as shown in Fig. 2.2. Measure and record  $h_0$ .

$h_0 = \dots\dots\dots$  mm [1]

- (b) (i) • When the switch is closed, the wire will get hot. **Do not touch the wire.**
- Close the switch and adjust the power supply until the ammeter reading  $I$  is between 0.40A and 0.50A.
  - Measure and record  $I$  and the voltmeter reading  $V$ .

$I =$  ..... A

$V =$  ..... V  
[2]

- (ii) The wire expands and this causes the wooden strip to move.

- The height of the end of the wooden strip above the bench is now  $h$ .

Measure and record  $h$ .

$h =$  .....mm

- Open the switch.

[1]

- (iii) Calculate the change in height  $\Delta h$ , where  $\Delta h = h_0 - h$ .

$\Delta h =$  ..... mm [1]

- (c) Estimate the percentage uncertainty in your value of  $\Delta h$ .

percentage uncertainty = ..... [1]



- (d) • Write down the value, in kelvin, of the room temperature  $T_0$  given on the card.

$T_0 = \dots\dots\dots$  K

- Calculate the temperature  $T$  of the wire using the relationship

$$T = T_0 + \alpha \Delta h$$

where  $\alpha = 11.8 \text{ K mm}^{-1}$ .

$T = \dots\dots\dots$  K [1]

- (e) Repeat (b) and (d) with the ammeter reading between 0.90 A and 1.00 A.

$I = \dots\dots\dots$  A

$V = \dots\dots\dots$  V

$h = \dots\dots\dots$  mm

$\Delta h = \dots\dots\dots$  mm

$T = \dots\dots\dots$  K  
[2]

- (f) It is suggested that the relationship between  $I$ ,  $V$ ,  $T$  and  $T_0$  is

$$IV\beta = (T^4 - T_0^4)$$

where  $\beta$  is a constant.

- (i) Using your data, calculate two values of  $\beta$ .

first value of  $\beta =$  .....

second value of  $\beta =$  ..... [1]

- (ii) Justify the number of significant figures you have given for your values of  $\beta$ .

.....  
.....  
..... [1]

- (iii) Explain whether your results in (f)(i) support the suggested relationship.

.....  
.....  
..... [1]

(g) (i) Describe four sources of uncertainty or limitations of the procedure for this experiment.

1. ....  
.....
2. ....  
.....
3. ....  
.....
4. ....  
.....

[4]

(ii) Describe four improvements that could be made to this experiment. You may suggest the use of other apparatus or different procedures.

1. ....  
.....
2. ....  
.....
3. ....  
.....
4. ....  
.....

[4]

[Total: 20]

**BLANK PAGE**



Permission to reproduce items where third-party owned material protected by copyright is included has been sought and cleared where possible. Every reasonable effort has been made by the publisher (UCLES) to trace copyright holders, but if any items requiring clearance have unwittingly been included, the publisher will be pleased to make amends at the earliest possible opportunity.

To avoid the issue of disclosure of answer-related information to candidates, all copyright acknowledgements are reproduced online in the Cambridge Assessment International Education Copyright Acknowledgements Booklet. This is produced for each series of examinations and is freely available to download at [www.cambridgeinternational.org](http://www.cambridgeinternational.org) after the live examination series.

Cambridge Assessment International Education is part of the Cambridge Assessment Group. Cambridge Assessment is the brand name of the University of Cambridge Local Examinations Syndicate (UCLES), which itself is a department of the University of Cambridge.